


Name: _____ Date: _____

Fractions and percentages




Write a fraction as a percentage

One whole = 100%



$\frac{1}{2} = 50\%$




I know $\frac{1}{2}$ is 50%
as $100 \div 2 = 50$.




1 Show the following fractions on these 100 grids and write the percentage.


a $\frac{1}{10} = \square \%$




b $\frac{4}{10} = \square \%$




c $\frac{9}{10} = \square \%$




d $\frac{1}{4} = \square \%$




e $\frac{7}{10} = \square \%$




f $\frac{2}{10} = \square \%$



g $\frac{3}{4} = \square \%$



h $\frac{1}{5} = \square \%$



2 Look at questions f and h. What do you notice? On the back of this sheet explain why this is.