

(I) M;N

Date 16-05-20

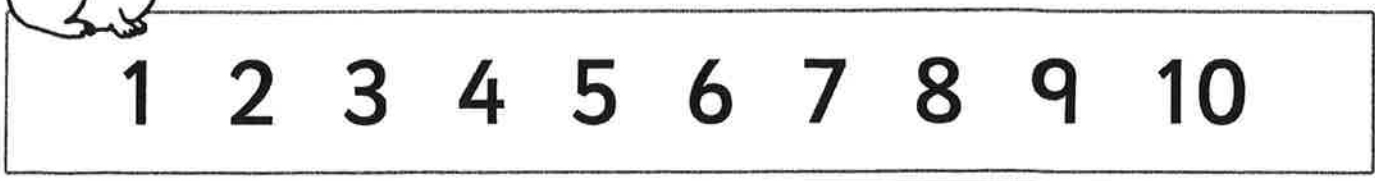
Name _____



2 More Than



Use this number line to help the bunny hop 2 more than...



2 more than 5 =

2 more than 6 =

2 more than 7 =

2 more than 8 =

2 more than 1 =

2 more than 4 =

2 more than 2 =

2 more than 3 =

Now try these!



2 more than 10 =

2 more than 18 =


2 more than 17 =

2 more than 12 =

2 more than 13 =

Ladybird Doubles

Write the number sentence for each ladybird double.



$6 + 6 = \underline{\hspace{2cm}}$




$7 + 7 = \underline{\hspace{2cm}}$



$8 + 8 = \underline{\hspace{2cm}}$



$9 + 9 = \underline{\hspace{2cm}}$



$10 + 10 = \underline{\hspace{2cm}}$