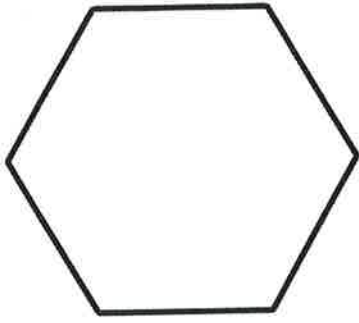


M:SSM
8.6.20

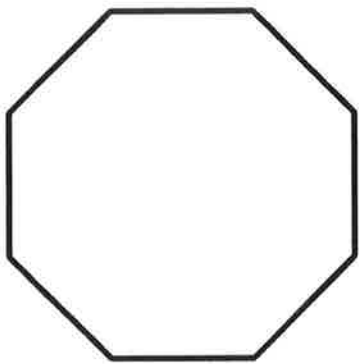
Properties of 2D Shapes

Write down the properties of the shapes.



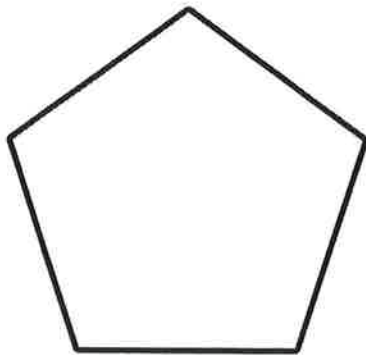
A hexagon has ___ sides.

A hexagon has ___ corners.




An octagon has ___ sides.

A octagon has ___ corners.



A pentagon has ___ sides.

A pentagon has ___ corners.



A circle has ___ side.

A circle has ___ corners.



Repeating Patterns

Can you continue the patterns below?




1.

																			
---	---	--	--	--	--	--	--	--	--	--	--	--	--	--	--	--	--	--	--





2.

																			
---	---	--	--	--	--	--	--	--	--	--	--	--	--	--	--	--	--	--	--






3.

																			
---	---	---	--	--	--	--	--	--	--	--	--	--	--	--	--	--	--	--	--

4.

																			
---	---	---	---	--	--	--	--	--	--	--	--	--	--	--	--	--	--	--	--

5.

																			
---	---	---	---	---	--	--	--	--	--	--	--	--	--	--	--	--	--	--	--

