

# Sweet shop sets

Date: \_\_\_\_\_



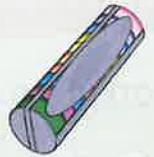
Count sets of 2, 5 or 10 to find a total



2 sweets



5 sweets



10 sweets



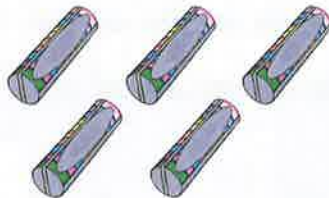
packets

sweets altogether



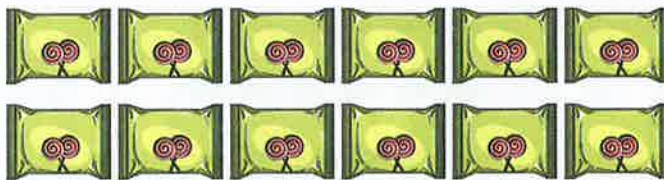
packets

sweets altogether



packets

sweets altogether



packets

sweets altogether



packets

sweets altogether

### Teacher's notes

For each set of sweets, children count and write down how many packets there are. They then count in 2s, 5s or 10s to find out how many sweets there are altogether in each set.

Will pub  
A se  
but.  
to th  
and  
poss

Coll  
Pub.

An i  
The  
1 Lo  
Lon  
SE1

Br  
w

© H.  
10  
ISBN

The  
auth

All ri  
repr  
form  
reco  
the F  
Unit  
90 T

Briti  
A Ca  
Britis

Cov  
Inter  
Desi  
Illusi

Print