

# How many pies?

Combine quarters to make one whole



Date: \_\_\_\_\_

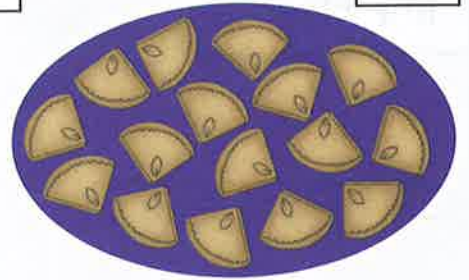
## Teacher's notes

Children write how many quarter pieces of pie there are on each plate. Then they draw them as whole pies and write the number of pies in the space provided to complete each statement.



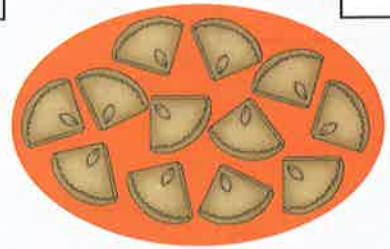
quarters make

whole pies.



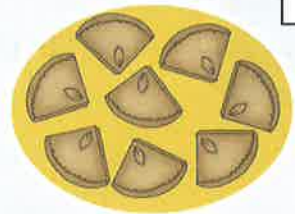
quarters make

whole pies.



quarters make

whole pies.



quarters make

whole pie.

