

Name: _____

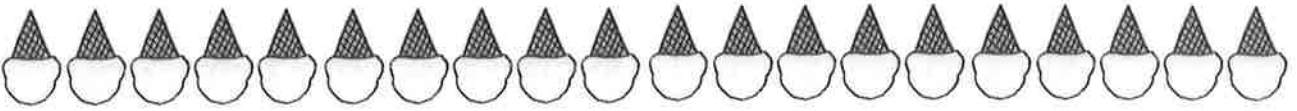

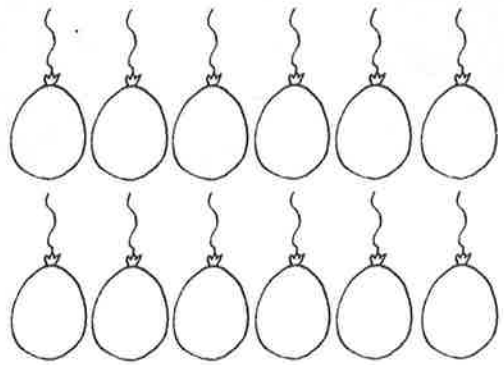
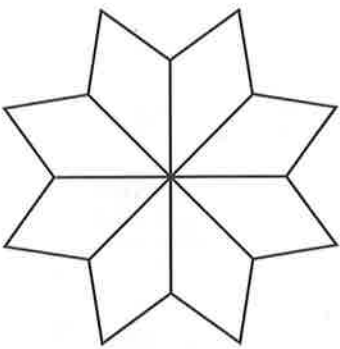

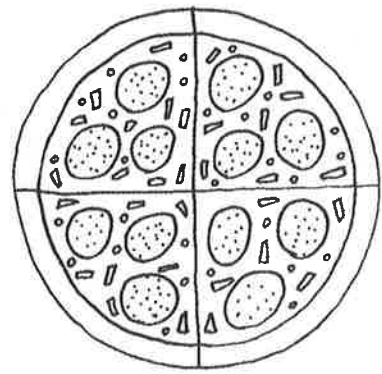
Date: _____

Quarters quiz

- Find $\frac{1}{4}$ of a shape or group of objects
- Know that a quarter is $\frac{1}{4}$ of 4 equal parts

You will need:

- coloured pencils
- counting objects, such as buttons or blocks



A quarter of is

What to do

- Ask your child to colour $\frac{1}{4}$ of each shape or object.
- Then ask your child to count the number of objects in each set and colour $\frac{1}{4}$ of them. (To work out how many are in $\frac{1}{4}$, share a set of counting objects into 4 equal parts.)
- Finally, ask your child to count the ice-creams and draw a flake in $\frac{1}{4}$ of them.



Use everyday situations to help your child understand fractions and find $\frac{1}{4}$ of a number, e.g. count out 4, 8, 12, 16 or 20 grapes and find $\frac{1}{4}$ by sharing them equally between four bowls; cut a pizza into quarters, remembering that each of the four parts must be exactly the same size.