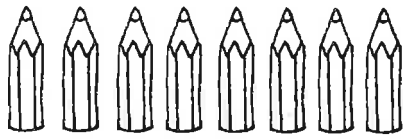


Name: _____ Date: _____


Quarter questions

Find a quarter of a set of objects


You will need:
• coloured pencils




$\frac{1}{4}$ of is .




$\frac{1}{4}$ of is .



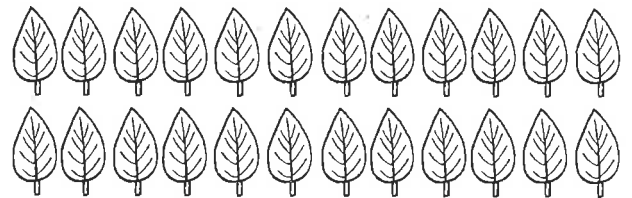
$\frac{1}{4}$ of is .




$\frac{1}{4}$ of is .




$\frac{1}{4}$ of is .



$\frac{1}{4}$ of is .



$\frac{1}{4}$ of is .



$\frac{1}{4}$ of is .

Teacher's notes

Children count the number of objects in each set, colour one quarter and complete the sentence.