


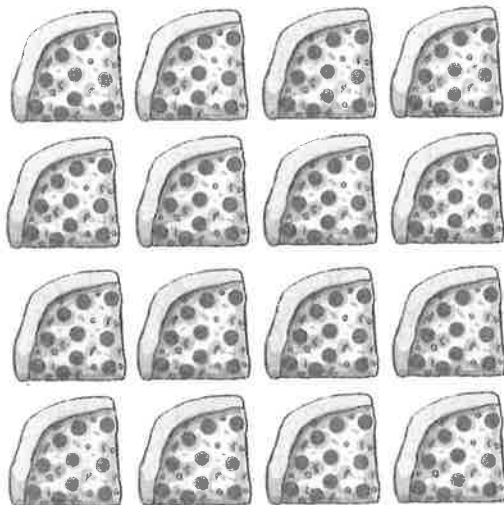
Name: _____ Date: _____

Picnic quarters

Combine quarters to make 1 whole

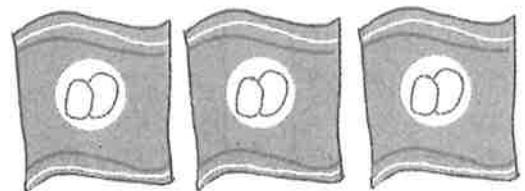


Each slice is $\frac{1}{4}$ of a pizza. How many pizzas have been shared?




pizzas altogether

Only 1 quarter of the packets of crisps are left. How many were there at the start of the picnic?




packets altogether

1 quarter of the juice cartons are left. How many were there to start with?



cartons altogether

Each slice is $\frac{1}{4}$ of a cake. How many cakes have been shared?



cakes altogether