


## Halves and Quarters

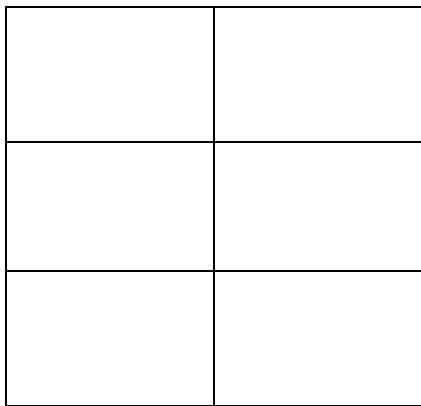
Shade in  $\frac{1}{2}$  or  $\frac{1}{4}$  of the shapes below.



Shade  $\frac{1}{2}$




Shade  $\frac{1}{2}$



Shade  $\frac{1}{2}$




Shade  $\frac{1}{2}$



Shade  $\frac{1}{4}$



Shade  $\frac{1}{4}$



Shade  $\frac{1}{4}$



Shade  $\frac{1}{4}$