

Date: \_\_\_\_\_


# More, less or the same?

Compare capacities of containers with a litre




**You will need:**


- six containers of varying sizes
- litre jug
- water tray
- red and blue coloured pencils



the same as a litre



less than a litre



more than a litre

**Teacher's notes**

Provide children with six containers labelled A–F (varied in size to match the labels above). Children estimate the capacity of each container, deciding whether the container holds the same as, less than or more than a litre, and write the letter of the container in the appropriate circle using a red pencil. Then they use a litre jug to fill each container. They use a blue pencil to either tick the letter in the circle, if they estimated correctly, or to write the letter in the correct circle if they estimated incorrectly.

