


Castle problems

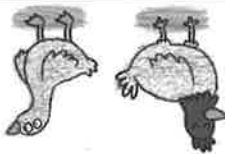
Solve addition and subtraction problems using mental and written methods

The castle has 35 windows, 47 arrow slits and 68 doors. How many windows and arrow slits are there altogether?



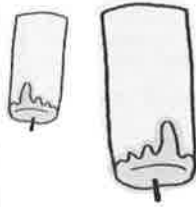
The castle has 21 red flags and 36 yellow flags. There are 15 flag poles. How many flags are there in total?

There are 26 chickens, 18 geese and 13 pigs. How many birds are there?



83 people and 62 animals live in the castle. 29 of the people go out for the day. How many people stay in the castle?

The cook makes 85 bowls of soup. 67 bowls of soup and 72 slices of bread are eaten. How many bowls of soup are left?



74 candles and 12 fires were burning in the castle. 39 of the candles went out. How many candles are still burning?

Teacher's notes

Children use mental and written methods to solve the word problems.