

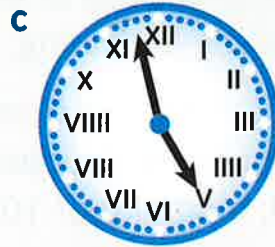
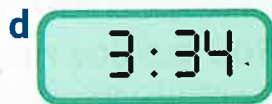
# Just a minute



Read and write the time to the minute on 12-hour analogue and digital clocks

**Challenge 1**

Write each time in words.



**Example**



16 minutes past 12

**Challenge 2**


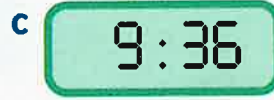
1 Write the digital time to match each time below.

- a** 13 minutes past 6    **b** 5 past 8    **c** 22 minutes to 2  
**d** six forty-six    **e** 10 to 10    **f** 18 minutes to 1

**Example**

12 minutes to 4  
3:48

2 Write these digital times 20 minutes later.



**Challenge 3**

The time this clock shows is 11:37.  
Write in digital form the time it will show:

- a** in 2 hours' time    **b** in half an hour's time  
**c** 18 minutes later    **d** 48 minutes later

