

Name : _____

Score : _____

Measuring Capacity

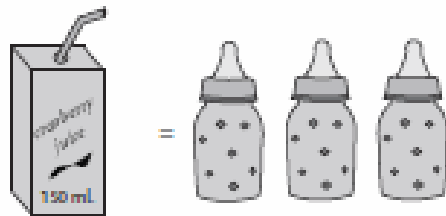
Calculate the capacity.

1)



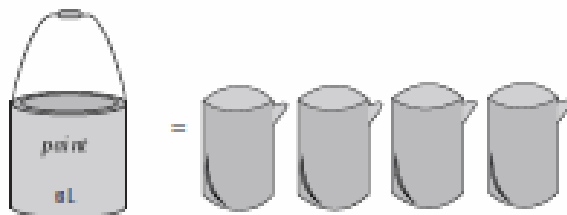
Capacity of each  = _____ mL

2)



Capacity of each  = _____ mL

3)



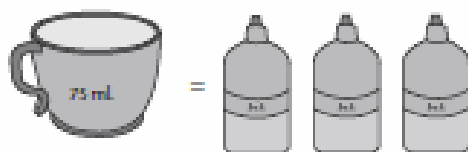
Capacity of each  = _____ L

4)



Capacity of each  = _____ mL

5)



Capacity of each  = _____ mL