

Tenths

- Count up and down in tenths
- Find tenths by dividing by 10

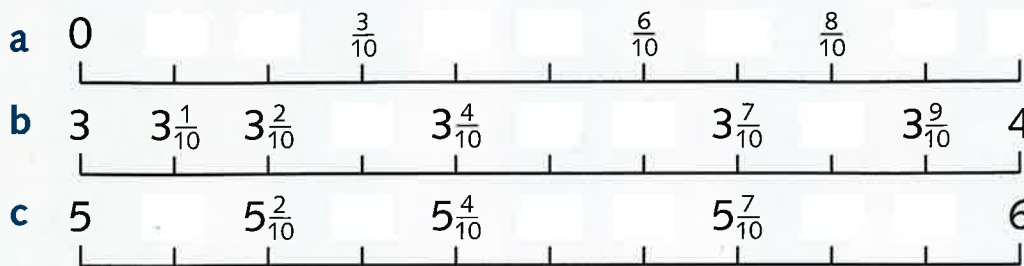


This number line is divided into 10 equal sections so they are tenths.

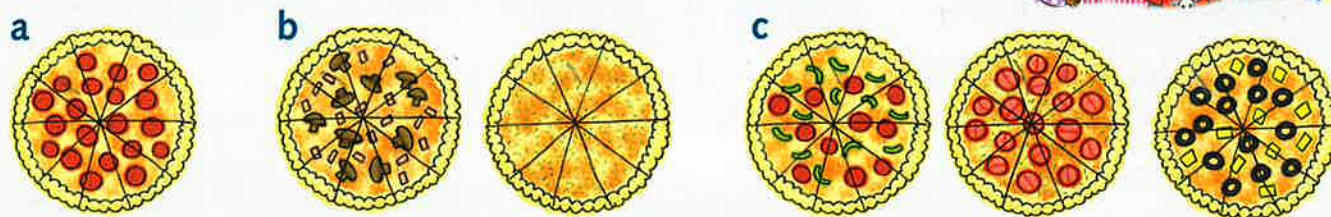


Challenge

1 Find the missing tenths on the number lines.

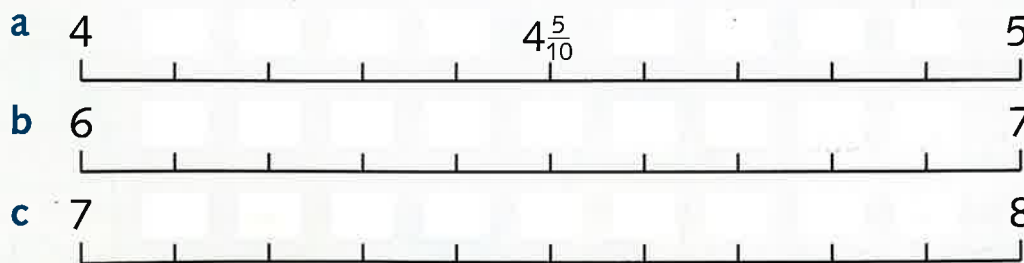


2 10 children want to share these pizzas between them. How many pieces will each of them get?



Challenge

1 Find the missing tenths on the number lines.



2 Divide these numbers by 10.

- a 2 b 5 c 1 d 3 e 4 f 6

Challenge

Write the tenths that come between these whole numbers.

- a 3 and 4 b 14 and 15 c 23 and 24

